



# Anand Niketan

## Maninagar Campus

Name : \_\_\_\_\_

Subject : Math

Date: 18-06-19

Grade : I Section : \_\_\_\_\_

Practice Worksheet-I

Roll No: \_\_\_\_\_

Dear Parent,  
This circular is to let you know  
about the upcoming Periodic Test-I  
of **Math on 25 -06-2019**

### Syllabus:

**Ch:1** Comparison

**Ch:2** Numbers From 0 To 10

Table of 0 & 1

### Subject Enrichment Activity:

First in Math (10M)

Mental Math (5M)

Math lab (5M)

Notebook (10M)

**Dictation of Ch-1**

**Comparison will be**


**conducted on 28/6/19**

**Mental Math of Ch-2**

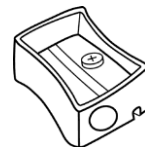
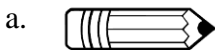
**Numbers from 0 to 10 will**  
**be conducted on 25/6/19**

### Q.1 Tick the correct option:

1. Circle the biggest flower



2. Circle the odd one out



3. Tick the bird with more eggs.



4. The dog is \_\_\_\_\_ the table.


a. above

b. below

c. near



5. Circle the child who is lighter in weight.



### Q.2. Circle the smallest number:

1. 

9	4	2	0
---	---	---	---

2. 

5	6	7	8
---	---	---	---

3. 

1	3	7	9
---	---	---	---

4. 

8	9	10	7
---	---	----	---

**Q.3. Circle the largest number:**

1. 

3	5
8	2

2. 

9	10
0	6

3. 

3	4
5	6

4. 

2	1
4	3

**Q.4. Put the correct sign <, > or =:**

a. 8 \_\_\_\_\_ 8

b. 1 \_\_\_\_\_ 10

c. 5 \_\_\_\_\_ 2

d. 0 \_\_\_\_\_ 9

e. 10 \_\_\_\_\_ 10

f. 7 \_\_\_\_\_ 4

**Q.5. Write the numbers in ascending order:**

a. 4      9      2      3

b. 6      10      0      1

A. \_\_\_\_\_

A. \_\_\_\_\_

**Q.6. Write the numbers in descending order:**

a. 5      8      1      3

b. 7      8      9      10

A. \_\_\_\_\_

A. \_\_\_\_\_

**Q.7. Write after, before or between numbers:**

a. \_\_\_\_\_ 2

b. 8 \_\_\_\_\_

c. 8 \_\_\_\_\_ 10

d. 0 \_\_\_\_\_

e. 1 \_\_\_\_\_ 3

f. \_\_\_\_\_ 1

**Q.8. Write the numbers names of the following:**

a. 8 - \_\_\_\_\_

b. 0 - \_\_\_\_\_

c. 3 - \_\_\_\_\_

Q.9. I am the only number that is spelled with the same amount of letters as my own value, which number am I?

A.

d.10 - \_\_\_\_\_

e. 7 - \_\_\_\_\_

f. 4 - \_\_\_\_\_

### Q.10. Tables

<b>0 X 0 = 0</b>

<b>1 X 0 = 0</b>

### Q.11 Answer the following questions:

1. Circle the dog which is above the house.
2. Tick the dog which is standing in front of the house.
3. Circle the dog which is in the house.
4. Tick the dog which is standing between the house.



30. Dog on doghouse



31. Dog by doghouse



32. Dog over doghouse



33. Dog between doghouses



34. Dog in doghouse



35. Dog inside doghouse



36. Dog by doghouse



37. Dog on doghouse



38. Dog by doghouse